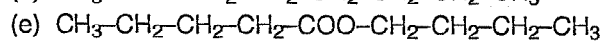
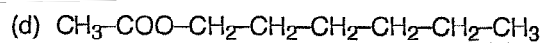
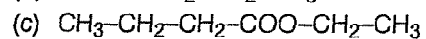
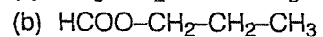
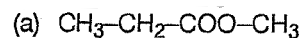


## Esters

Name - \_\_\_\_\_

1.) Name the following molecules.



a.)

b.)

c.)

d.)

e.)

2.) Draw the following molecules.

(a) propyl pentanoate

(b) methyl hexanoate

(c) ethyl propanoate

(d) butyl butanoate

(e) hexyl methanoate

a.)

b.)

c.)

d.)

e.)

3.) Draw the carboxylic acid and alcohol used to create each ester in question 1.

a.)

b.)

c.)

d.)

e.)