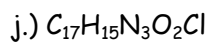
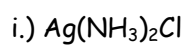
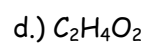
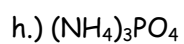
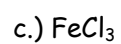
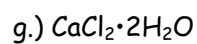
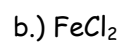
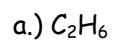
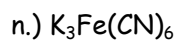
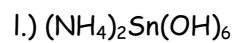
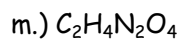


## Percent Composition

Name - \_\_\_\_\_

1.) Calculate the percentage composition of the following.





2.) Calculate the percentage of the **bold** species in each of the following.

