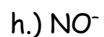
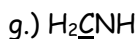
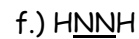
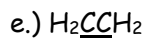
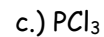
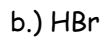
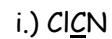
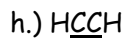
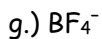
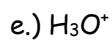
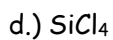
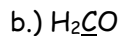


More Lewis Diagram Drawings Practice

1.) Write Lewis structures for the following: (please note, none of the solutions are using the expanded octet rule or formal charges).



2.) Write Lewis structures for the following: (please note, none of the solutions are using the expanded octet rule or formal charges).



3.) Write Lewis structures for: (please note, none of the solutions are using the expanded octet rule or formal charges).

